




## 第一单元达标测试卷



时间：60分钟 满分：100分

题号	一	二	三	四	五	六	七	八	总分
得分									

一、判断下面图形中分别是哪个小朋友看到的，在括号里填序号。（共8分）



( )



( )


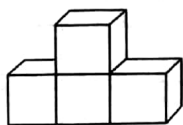


( )




( )

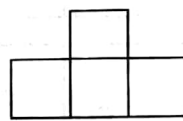
二、下面各幅图分别是哪个方向看到的？在括号里填入正确的答案。（共12分）



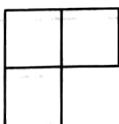
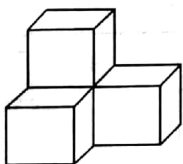
( ) 面



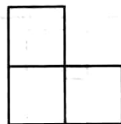
( ) 面



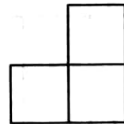
( ) 面



( ) 面



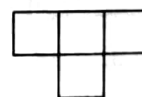
( ) 面



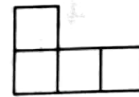
( ) 面

三、选一选。（共8分）

立体图形	从上面看	从正面看	从右侧面看



A



B



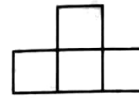
C



D



E




F




四、下面的图形分别是谁看到的？连一连。（共 28 分）

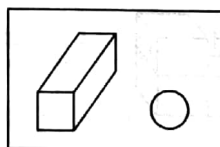
1.



2. 判断下面的图形分别是谁看到的，连一连。



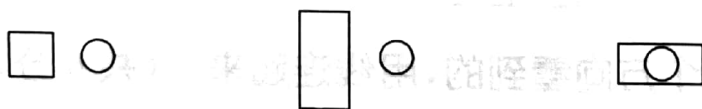
3.



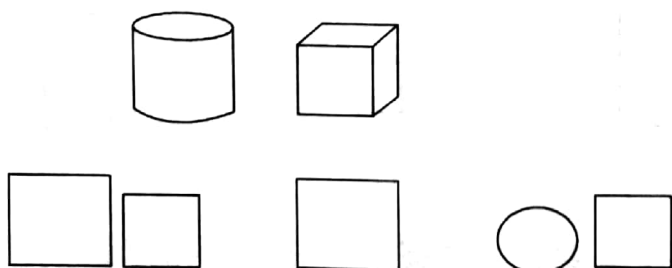
从上面看

从右面看

从正面看



4.



从正面看

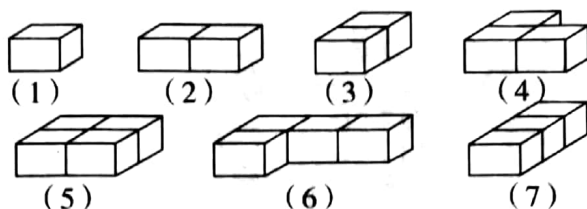
从上面看

从左面看




五、仔细观察图形，把正确答案的序号填在横线上。（共 12 分）

1.

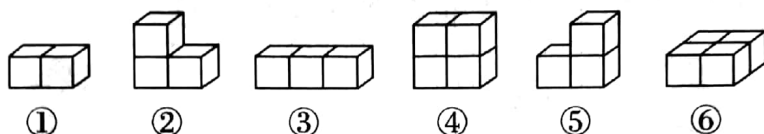



(1) 上面的物体，从正面看，\_\_\_\_\_ 看到的是 .


(2) 上面的物体，从正面看，\_\_\_\_\_ 看到的是 .

(3) 上面的物体，只要从任何一个面看，\_\_\_\_\_ 看到的都是 .

2.

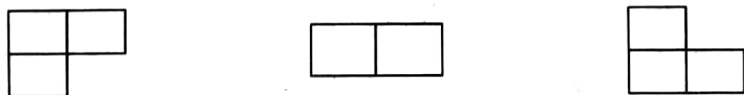


(1) 从上面看是  的有 ( )；

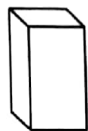
(2) 从正面看是  的有 ( )；

(3) 从侧面看是  的有 ( )。

六、下面的立体图形从上面看到的分别是什么形状？连一连。（共 8 分）



七、下面的图形分别是 从哪个方向看到的，用线连起来。（共 6 分）

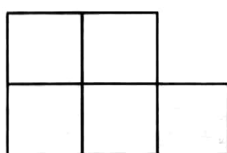
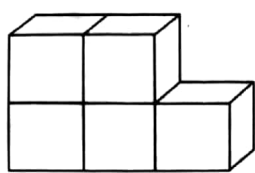


从正面看


从左面看

从上面看

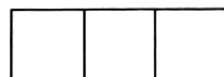




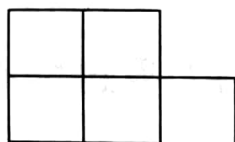
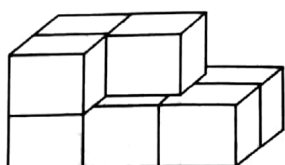
上面



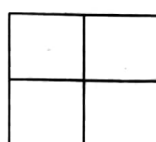
正面



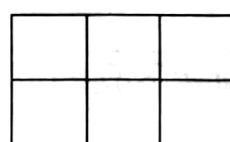
左面



上面



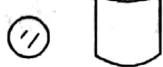
正面



右面

八、下面这些图形分别是 从哪个方向看到的，在括号里填入正确的答案。（共 18 分）

1.



( )

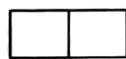
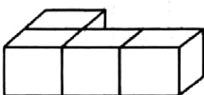


( )

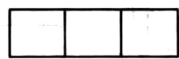


( )

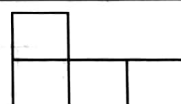
2.



( )

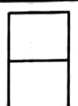
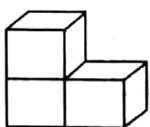


( )

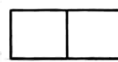


( )

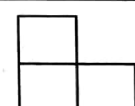
3.



( )


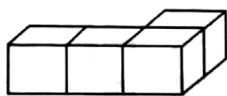


( )

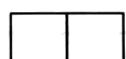


( )

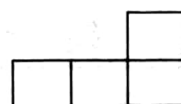
4.



( )

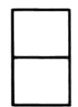
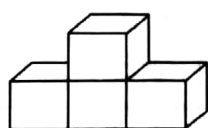


( )

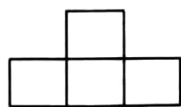


( )

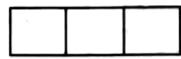
5.



( )

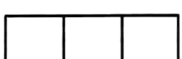
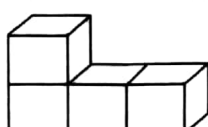


( )




( )

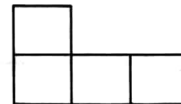
6.



( )



( )



( )



扫描全能王 创建